



Name:

Class:

Date:

1 Complete the sequence
12, , 20,
, .

2 Double 400 is


3 Double 900 is

4 $30 \times 50 =$


5 Write your coin card for... x21

x 21	
1	
2	
5	
10	
20	
50	
100	


6 Mully is hiding behind the biggest multiple of 4 without going past 50




7 $423 + 25 =$




8 $526 + 49 =$



9 $442 + 36$



10 $981 - 32$



MY LAST SCORE?!

HAVE I BEAT THAT?!