



Name: _____

Class: _____

Date: _____

1 Tick the number
Three Hundred
300 800 900


2 Write a number
'more than' 12
but 'less than' 20

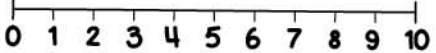
3 Count backwards
49, 48, 47,
 , ,


4 Count backwards
83, 82, 81, , ,

5 Double 30 is ...

6 $4 + \square = 10$

7 
Tick the correct number sentence
 $2 + 4 =$ $3 + 6 =$ $4 + 3 =$

8 $5 + 2 =$


9 
Tick the correct number sentence
 $4 - 2 =$ $8 - 5 =$ $7 - 4 =$

10 $6 - 4 =$
